



NEW BLOWN
-An Int'l Standard School-
5th Week Lesson Plan-2020
Grade-I

Subject	Lesson description
Bang-I	১. “বাকবাকুম পায়রা”: কবিতাটি সম্পূর্ণ মুখস্থ ২. “বাকবাকুম পায়রা” কবিতা রিভিশন এবং শব্দার্থ মুখস্থ ৩. “বাকবাকুম পায়রা” শীট থেকে বাক্য তৈরী ৪টি মুখস্থ (২নং)
Bang-II	১. বিপরীত শব্দ: (বালক-কঠিন) পৃ: ৩৫ ২. এক কথায় প্রকাশ: (অকৃতজ্ঞ-কৃজন), পৃ: ৪১
Eng.-I	1. E.F.T: Unit-13, Rhyme: 2 hands, pg;26 (Rev) 2. G.M: In the Children’s Park: pg; 37,38 R/P with spelling and words meaning 3. G.M: In the Children’s Park: B/A, pg:39 (Structures) pg; 40 (words in use) write in Book
Eng.-II	1. Paragraph: “Your Mother” (From sheet) 2. Unit: 25 (Jumbled Sentences): Read the pg:45 and write on Book pg; 45 (A)
Math	1. E.M: pg; 66, W/P: (2,3) 2. E.M: pg: 66, W/P: (4) 3. M.A: Times table: 8 4. M.C.Q Sheet
Science	1. Unit: 9 (Water) Merit Test 2. Unit: 9, W/M & S/Q (a)
S.S.T	1. Lesson:8 (Bangladesh Our Motherland), R/P with meaning, pg: 16, 17 2. Lesson: 8, Merit Test & Matching (From Sheet)
Religion	1. Chapter: 2, Lesson: 03, pg; 30, Q/A: (6,8) 2. pg; 31, Exercise: (A,B,C) no.
Hindu Religion	1. Lesson: 8 (Three Expressions of God’s Power) pg;10, R/P with meaning 2. Lesson:8 Matching & F/B (1,2) (Sheet)
Spoken & G.K	Unit-5, Number 1 to 10 Vocabulary + Sentence Structure



NEW BLOWN
-An Int'l Standard School-
6th Week Lesson Plan-2020
Grade-I

Subject	Lesson description
Bang-I	১. “বাকবাকুম পায়রা”: শীট থেকে প্রশ্নোত্তর ৩নং (ক,খ) ২. “বাকবাকুম পায়রা” কবিতা ও শীট রিভিশন ৩. পাঠ: ৪৭ (মায়ের ভালোবাসা): সম্পূর্ণ রিডিং ও মেধা যাচাই শীট
Bang-II	১. এক কথায় প্রকাশ: (মিউমিউ- হুকাহুয়া), পৃ: ৪১ ২. সঠিক উত্তর (শীট থেকে)
Eng.-I	1. E.F.T: Unit-17, Rhyme: Rain Rain, pg; 34 (Rev) 2. G.M: In the Children’s Park: Merit Test 3. G.M: In the Children’s Park: W/M+ Jumble words (from sheet)
Eng.-II	1. Unit: 25 (Jumbled Sentence) pg; 46 (B) 2. Unit: 25 (Jumbled Sentence) pg; 46 (C)
Math	1. E.M: pg; 69, Ex: 1 2. E.M: pg: 69, W/P: (2,3) 3. M.A: S/Q Sheet
Science	1. Unit: 9, S/Q (b) & B/Q (a) 2. Unit: 9, B/Q (b)
S.S.T	1. Lesson:8, S/Q (a,b,c) (Sheet) 2. Lesson: 8, B/Q (a,b) (Sheet)
Religion	1. Part: 01, Lesson: 04, pg; 11 Q/A: 1 no: (Revi) 2. Part: 01, Lesson: 05, pg; 14 Q/A: 1 no: (Revi)
Hindu Religion	1. Lesson: 8, Q/A: (a,b) no (Sheet) 2. Lesson: 8, Q/A: (c,d) no (Sheet)
Spoken & G.K	Unit-6, Farm Animals Vocabulary + Sentence Structure



5th week

NEW BLOWN

- An Int'l Standard School -



Sub: Bangla 1st paper

Class: Grade-I

বাক বাকুম পায়রা

১। শব্দার্থঃ

পায়রা - কবুতর

টায়রা - মুকুট

২। বাক্য তৈরিঃ

বউ - পালকিতে বউ যাচ্ছে।

পালকি - বেহারা পালকি নিয়ে যায়।

সোনা - বউ সোনার পালকিতে চড়বে।

সাজবে - বুবু আজ বউ সাজবে।

৩। প্রশ্নোত্তরঃ

ক) পায়রা মাথায় কি পরেছে?

উঃ পায়রা মাথায় টায়রা পরেছে।

খ) বউ কিসের পালকিতে চড়বে?

উঃ বউ সোনার পালকিতে চড়বে।



6th week

NEW BLOWN

- An Int'l Standard School -



Sub: Bangla 1st paper

নাম: _____

Class: Grade-I

রোল: _____

মেধা যাচাই

পাঠ-৪৭ 'মায়ের ভালোবাসা'

১। সঠিক উত্তরটিতে টিক (✓) চিহ্ন দাও:

ক) একদিন সাথীদের নিয়ে কে বসেছিলেন?

i) পাখি ii) মহানবী iii) লোকটি

খ) মহানবী দেখদেলন কাছেই----- উড়ছে।

i) মা পাখিটা ii) বাচ্চারা iii) লোকটি

গ) পাখির বাসায় কি ছিল?

i) একটি ছানা ii) দুটি ছানা iii) মাছ

ঘ) কে বাচ্চাদের আদর করল?

i) লোকটি ii) নবীজি iii) মা পাখিটা

ঙ) কাকে দূরে সরে যেতে বলল?

i) লোকটিকে ii) পাখিটিকে iii) বাচ্চাদেরকে

চ) পাখিটি বাচ্চাদের কি দিয়ে ঢেকে রাখল?

i) ডানা ii) পা iii) মাথা

ছ) লোকটির হাতে কি ছিল?

i) মানুষ ii) হাঁস iii) পাখির বাসা

জ) কার মমতার তুলনা হয় না?

i) মায়ের ii) লোকের iii) মানুষের

ঝ) বাসায় কয়টি ছানা ছিল?

i) দুইটি ii) একটি iii) তিনটি

ঞ) কে বললেন দেখ, মায়ের কত ভালোবাসা?

i) মহানবী ii) লোকটি iii) পাখি

NEW BLOWN

- An Int'l Standard School -

Sub: Bengali 2nd paper

Class: Grade-I



সঠিক উত্তর

১। সঠিক উত্তরটিতে টিক (✓) চিহ্ন দাও:

ক) বর্ণ কত প্রকার?

- i) দুই ii) তিন iii) চার

উত্তরঃ _____

খ) বাংলা ভাষায় মোট কতটি বর্ণ আছে?

- i) ৪৮টি ii) ৫০টি iii) ৬০টি

উত্তরঃ _____

গ) 'আদর' এর বিপরীত শব্দ কোনটি?

- i) মান ii) অচেনা iii) অনাদর

উত্তরঃ _____

ঘ) কোকিলের ডাক=?

- i) কূজন ii) কুহুকুহ iii) কৃতজ্ঞ

উত্তরঃ _____

ঙ) শব্দ কত প্রকার?

- i) চার ii) ছয় iii) পাঁচ

উত্তরঃ _____

চ) 'সরল' এর স্ত্রীলিঙ্গ কোনটি?

- i) সরলা ii) সেবিকা iii) দাসি

উত্তরঃ _____

ছ) কয়েকটি শব্দ পাশাপাশি বসে যদি মনের ভাব পুরোপুরি প্রকাশ পায়, তখন তাকে- বলে।

- i) শব্দ ii) বাক্য iii) ধ্বনি

উত্তরঃ _____

জ) 'দূরে' এর বিপরীত শব্দ কোনটি?

- i) বেশি ii) নিচু iii) নিকটে

উত্তরঃ _____

ঝ) স্বরবর্ণ মোট কয়টি?

- i) ১০টি ii) ১১টি iii) ১২টি

উত্তরঃ _____

এও) 'জনক' এর স্ত্রীলিঙ্গ কোনটি?

i) জননী ii) তরণী iii) নদী

উত্তরঃ _____

উত্তরঃ ক (i), খ (ii), গ) (iii), ঘ) (ii), ঙ) (iii), চ) (iii), ছ) (ii), জ) (iii), ঝ) (ii), ঞ) (i) ।



Sub: Gul Mohar

Class: Grade-I

Lesson-6
In the Children's Park

1. M.C.Q:

a) Who are playing?

- i) The boy ii) The girl iii) The children

Ans: _____

b) Where the children are playing?

- i) In a garden ii) Under a tree iii) Near a river

Ans: _____

c) Who is skipping?

- i) Ravi ii) Mina iii) Amit

Ans: _____

d) Ravi jumps down from the__

- i) hill ii) tree iii) stairs

Ans: _____

e) Who plays with Fatima?

- i) Sunil ii) Grace iii) Navin

Ans: _____

f) Who are in the sand-pit?

- i) Sunil and Fatima ii) Amit and Ravi iii) Mina and Sunil

Ans: _____

g) What are they doing?

- i) Studying ii) Playing iii) Eating

Ans: _____

h) Where is something?

- i) under the tree ii) in the sand iii) in the park

Ans: _____

i) What was they found in the sand?

i) Book

ii) Toys

iii) Coin

Ans: _____

j) Sunil and Mina go to the ____.

i) teacher

ii) Father

iii) friends

Ans: _____

k) Who is crying?

i) Amit

ii) Fatima

iii) Navin

Ans: _____

l) Who thanked Mina?

i) Teacher

ii) Navin

iii) Sunil

Ans: _____

2. Fill in the blanks:

a) The children are _____ under a tree.

b) Navin is _____.

c) There is something in the _____.

d) It is a new _____ coin.

e) Sunil and Mina go to the _____.



Sub: Gul Mohar (Reader)

Class: Grade-I

Unit - 06
In The Children's Park

1. M.C.Q: Answer:

(a) iii), (b) ii), (c) iii), (d) ii), (e) ii), (f) iii), (g) ii), (h) ii), (i) iii), (j) i),
(k) iii), (l) ii).

2. Fill in the blanks: Answer:

- a) playing
- b) crying
- c) sand
- d) ten-rupee
- e) teacher

3. Word meaning:

skip = pass over
rupee = money
find = meet with

4. Jumble words:

inoc = coin
miels = smile
anhkt = thank
renud = under
eeathrc = teacher

5. Answer the short questions:

a. Who is Grace playing with?

Ans.: Grace is playing with Fatima.

b. Who finds the coin?

Ans.: Mina finds the coin.

6. Answer the broad questions:

a. What are Mina and Sunil making?

Ans.: Mina and Sunil are making a house in the sand-pit.

b. Why is Navin crying?

Ans.: Navin is crying because he cannot find his ten-rupee coin.



Sub: English 2nd Paper

Class: Grade-I

◆ **Write a paragraph about “Your Mother”.**

Paragraph

My Mother

My mother's name is _____. She loves me very much. She cooks special dishes and looks after family members. She takes care of my health and studies. She helps poor and sick people. I love my mother very much.



Sub: Science

Class: Grade-I

Merit Test

Name: _____ Roll: _____ Shift: _____

Merit Test

Unit-9 (Water)

1. Choose the best Answer:

- a) All plants and _____ need water.
 i) girls ii) animals iii) boys

Ans: _____

- b) River water is clean enough to drink.
 i) Yes ii) No iii) Both

Ans: _____

- c) Some _____ water goes below the soil.
 i) rain ii) air iii) pond

Ans: _____

- d) In which water has germs?
 i) Clean water ii) Cold water iii) Dirty water

Ans: _____

- e) We dig _____ to get water from under soil.
 i) river and lakes ii) lakes and ponds iii) wells and tube wells

Ans: _____

- f) Do not _____ the clean water.
 i) waste ii) use iii) drink

Ans: _____

- g) When we don't need water we will not leave taps _____.
 i) close ii) open iii) none of them

Ans: _____

- h) Dirty river or lake water is taken to the _____ in our city.
 i) school ii) shop iii) waterworks

Ans: _____

- i) Drinking dirty water is ____
i) dangerous ii) healthy iii) good

Ans: _____

2. Fill in the blanks:

- a) All _____ and _____ need water to live.
- b) Dirty water is cleaned in the _____.
- c) The clean water is _____ to our homes.



NEW BLOWN

- An Int'l Standard School -



Sub: Science Ahead

Class: Grade-I

Chapter – 9

Water

1. Choose the best answer:

a) (ii), b) (ii), c) (i), d) (iii), e) (iii), f) (i), g) (ii), h) (iii), i) (i).

2. Fill in the blanks:

a) plants, animals

b) waterworks

c) supplied

3. Word meaning:

utensil = an instrument for domestic use

stream = a flow of water, air or gas etc.

4. Answer the following short questions:

a) From where do we get water?

Ans: We get water from:

i) rain

ii) river

iii) lake

iv) pond

v) under the ground

b) Why do we need water?

Ans: We need water to cook, to keep ourselves, our clothes and utensils clean.

5. Answer the following broad questions:

a) How does water become dirty?

Ans: When dirt from our homes and factories are thrown into rivers and lakes, then the water becomes dirty.

b) How to clean dirty water from river or lake?

Ans: Dirty water from river or lake is taken to the waterworks. Here the dirt is removed and the germs are killed.



Sub: Social Studies

Class: Grade-I

Merit Test

Name: _____ Roll: _____ Shift: _____

Lesson: 8

Bangladesh Our Motherland

1. Choose the best Answer:

a) What is the name of our motherland?

- i) India ii) Bangladesh iii) Pakistan

Ans: _____.

b) How many districts in our country?

- i) 66 ii) 64 iii) 53

Ans: _____.

c) How many Thanas are there in our country?

- i) 700 ii) 899 iii) 599

Ans: _____.

d) Which is our main river?

- i) The Meghna ii) The Buriganga iii) The Shitalakkah

Ans: _____.

e) Which is our main crop?

- i) Chilly ii) Coffee iii) Paddy

Ans: _____.

f) What is the capital of Bangladesh?

- i) Sylhet ii) Dhaka iii) Khulna

Ans: _____.

g) Which country is called a land of river?

- i) India ii) Bangladesh iii) Nepal

Ans: _____.

h) What is the area of our motherland?

- i) 1,47,570 sq.km ii) 1,50,000 sq.km iii) 1,57,570 sq.km

Ans: _____.



Lesson: 8
Bangladesh Our Motherland

1. Choose the best Answer:

Ans: a) (ii), b) (ii), c) (iii), d) (i), e) (iii), f) (ii), g) (ii), h) (i)

2. Match the left column with the right column:

Left side	Right side
a) Bangladesh is our	main river.
b) The Padma is the	main crops.
c) Rice, Jute, Tea are the	Bangladesh.
d) We love our	motherland.

Ans: a) Bangladesh is our- motherland.

b) The Padma is the- main river.

c) Rice, Jute, Tea are the- main crops.

d) We love our- Bangladesh.

3. Answer the following short questions:

a) How many divisions are there in our motherland?

Ans: There are 8 divisions in our motherland.

b) Which countries are our neighbouring country?

Ans: India and Myanmar are our neighbouring country.

c) Where is the Bay of Bengal?

Ans: The Bay of Bengal is to the south of our motherland.

4. Answer the following broad questions:

a) Write the names of main five rivers of Bangladesh.

Ans: The names of main five rivers of Bangladesh are:

i) The Padma ii) The Meghna iii) The Jamuna

iv) The Surma v) The Karnaphuli

b) Write the names of any five main crops of Bangladesh.

Ans: The names of five main crops of Bangladesh are:

i) Rice ii) Jute

iii) Tea iv) Wheat v) Sugarcane



Lesson: 8

Three Expressions of God's Power

1. Fill in the blanks:

- a) God destroys the universe.
- b) God created the universe.
- c) God maintains the universe as Vishnu.

2. Match the words from the right side with the words in the left:

Left side	Right side
a) God created the universe	i) as Vishnu.
b) God maintains the universe	ii) as Brahma.
c) God destroys the universe	iii) kinds of power.
d) God has many	iv) as Maheswar.

Ans: (a+ii), (b+i), (c+iv), (d+iii).

3. Answer the following questions:

a) What the names of three principal powers of God.

Ans: The names of three principal powers of God are-

- i) The Holy Father.
- ii) The Holy maintainer.
- iii) The Holy destroyer.

b) What does the God do as Brahma?

Ans: God created the Universe as Brahma.

c) What does God do as Vishnu?

Ans: God maintains the Universe as Vishnu.

d) What does God do as Maheswar?

Ans: God destroys the Universe as Maheswar.

**NEW BLOWN**

- An Int'l Standard School -



Sub: Math (M.C.Q)

Class: Grade-I

Name: _____ Roll: _____ Shift: _____

1. Choose the best Answer:

1) How do you make 4? Give (✓) mark?

i) 7-2

ii) 7-3

iii) 9-4

2) Which sentence is true?

i) $3-3 = 2$

ii) $5-2 = 3$

iii) $6-3 = 2$

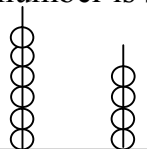
3) $6 ? 2 = 4$; Which sign is missing?

i) +

ii) ×

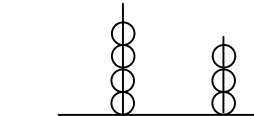
iii) -

4) What number is shown place value?



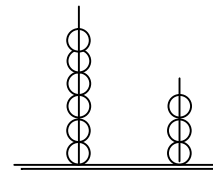
i)

6	4
---	---



ii)

5	2
---	---



iii)

7	2
---	---

5) " " Is this shape open or close?

i) Openii) Closeiii) None

Identify the position using ordinal number:

6) Left

Right

H → I → J → K → L → M → N

a) What is the position of 'L' from left?

i) Fifthii) Sixthiii) Third

b) What is the position of 'K' from right?

i) Secondii) Fourthiii) Fifth

7) 3 hundreds + 3 tens + 6 ones = ?

i) 336

ii) 363

iii) 362

8) How do you make 81? Give (✓) mark?

i) 9×8

ii) 9×9

iii) 10×9

9) The day before Saturday-- (✓) mark

i) Friday

ii) Wednesday

iii) Sunday

10) Which spelling is correct?

i) Secondii) Eighthiii) Twelveth

11) I have 3 sides. Who am I?

i) Circle

ii) Square

iii) Triangle

12) 2 tens – 2 ones? Give (✓) mark

i) 18

ii) 8

iii) 28

13) Which one is correct?

i) $9 > 6$

ii) $4 < 2$

iii) $6 > 9$

Ans: 1) (ii), 2) (ii), 3) (iii), 4) (i), 5) (i), 6) (a) (i); b) (ii), 7)(i), 8) (ii), 9) (i), 10) (i), 11) (iii), 12)(i), 13) (i).



NEW BLOWN

- An Int'l Standard School -



Sub: Math

Class: Grade-I

Name: _____ Roll: _____ Shift: _____

S/Q:

One word / short question

1. There are 1 cat and 2 dogs in a house. All these animals have _____ legs in all.

Ans : 12.

2. Here are 11 marbles. Take away 6. How many left?

Ans : 5

3. What is the number that is 4 less than 12?

Ans : It's 8.

4. Remain 3 leaving _____ from 4.

Ans : 1.

5. One week has 7 days. How many days are in 3 week?

Ans : 21 days.

6. When we divide something into 2 parts, what does we call it?

Ans : We call it "half".

7. Write the numbers :

a) Nine hundred nine Ans :

b) Eighty seven Ans :

c) Sixty two Ans :

8. Write in words :

a) 57 = Ans :

b) 39 = Ans :

c) 99 = Ans :

9. Compare and arrange the following numbers greater to smaller ">" sign.

74, 87, 62, 39, 37, 83

Ans : 87 > 83 > 74 > 62 > 39 > 37

10. Tuku has 10 ducks and 5 hens. How many ducks and hens she have altogether?

Ans : Total 15 pcs of ducks and hens.

11. A table has 4 legs. How many legs 3 tables will have?

Ans : The number of legs is 12.

12. What is circle?

Ans : The circle is a curved line.

13. What is triangle?

Ans : The shape that has three side is called triangle.

14. Fill in the blanks –

a) _____ + 5 = 8

b) _____ + 2 = 6

c) 5 + _____ = 7

d) 4 + _____ = 4

15. What is point?

Ans : A point is an exact location.

16. How many days in a week?

Ans : 7 days.

17. How many days make in a month?

Ans : 30 days in a month.

18. How many weeks make in a year?

Ans : 52 weeks.

19. Which number comes just before 90?

Ans : 89.